

8-14

Name _____

Date _____

Remembering

Add or subtract.

$$\begin{array}{r} 1. \quad \frac{5}{6} \\ - \frac{1}{3} \\ \hline \end{array}$$

$$\begin{array}{r} 2. \quad \frac{3}{4} \\ - \frac{5}{8} \\ \hline \end{array}$$

$$\begin{array}{r} 3. \quad \frac{3}{16} \\ - \frac{1}{8} \\ \hline \end{array}$$

$$\begin{array}{r} 4. \quad \frac{5}{9} \\ + \frac{1}{3} \\ \hline \end{array}$$

$$\begin{array}{r} 5. \quad \frac{3}{5} \\ + \frac{1}{4} \\ \hline \end{array}$$

$$\begin{array}{r} 6. \quad \frac{1}{6} \\ + \frac{2}{3} \\ \hline \end{array}$$

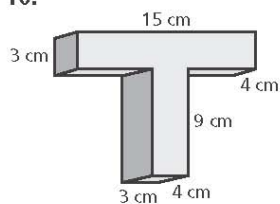
$$\begin{array}{r} 7. \quad 6 \\ - 3\frac{2}{5} \\ \hline \end{array}$$

$$\begin{array}{r} 8. \quad 1\frac{4}{9} \\ + 4\frac{2}{3} \\ \hline \end{array}$$

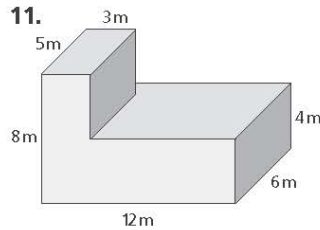
$$\begin{array}{r} 9. \quad 6\frac{4}{5} \\ - 2\frac{1}{10} \\ \hline \end{array}$$

Find the volume of each composite solid.

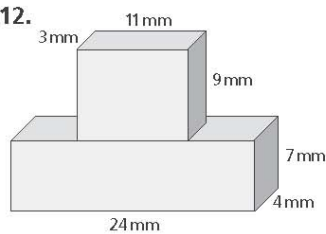
10.



11.



12.



13. **Stretch Your Thinking** Explain why a square is always a rectangle but a rectangle is not always a square.
